

2002 Texas State 4-H Goat Judging Contest
Senior Test

Contestant Number _____

All questions are worth one point each. Pages may have questions on the front AND back.

Multiple Choice

1. _____ The part of the scorecard that describes the legs, topline and breed character is:
A. Mammary System
B. General Appearance
C. Dairy Character
D. Body Capacity

2. _____ A Nigerian Dwarf doe must be disqualified if she is over _____ inches high at the withers:
A. 19.5
B. 23.6
C. 22.4
D. 24.0

3. _____ The Boer Goat was developed as a breed in what country?
A. Canada
B. South America
C. South Africa
D. New Zealand

4. _____ The ideal amount of fat covering the loin at the 13th rib is _____ of an inch.
A. 0.1
B. 0.5
C. 0.01
D. 0.05

5. _____ An ear that is less than 1 inch long, preferably non-existent on a LaMancha is called a _____ ear.
A. Elf
B. Gopher
C. Weasel
D. Cookie

6. _____ Which of the following would not be considered a disqualification for a Nigerian Dwarf?
A. Roman nose
B. Long, curly hair
C. White spot over 1 ½ inch in diameter
D. Pendulous ears

7. _____ How many points are allowed on The IBGA scorecard for the general appearance of a senior doe?
A. 50
B. 35
C. 20
D. 55

8. _____ Which of the following should not be considered when judging market goats
A. Structural correctness
B. Muscling
C. Amount of finish
D. Color pattern

9. _____ Having any color or pattern of colors in the hair is acceptable in which of the following pairs of breeds.
A. Nubian and Oberhasli
B. French Alpine and LaMancha

C. Nigerian Dwarf and Nubian

D. Toggenburg and Boer

10. _____ Which of the following is not a disqualification of a dairy goat:
A. Double orifice in a buck's teat
B. Doe with a crooked face
C. Solid black Oberhasli buck
D. Total blindness
11. _____ By adding the seriousness of the defects, place the following animals in the correct order: (1) A dark cream Saanen with slightly posty legs; (2) A mature Alpine doe that weighs 125 pounds and has a pendulous udder; (3) A mature Alpine doe is slightly posty and has slightly sprung pasterns; (4) A Saanen doe with a crooked face and moderately open shoulders.
A. 3-2-1-4
B. 1-4-3-2
C. 1-3-4-2
D. 3-1-2-4
E. 2-3-4-1
F. 4-3-1-2
12. _____ Which would not be an allowable marking on an Oberhasli doe:
A. Pure black
B. Ears that are black inside
C. Black legs below knees and hocks
D. Black face stripes
E. None are acceptable
F. All are acceptable
13. _____ An Alpine with white fore quarters and black rear quarters is referred to by which color pattern:
A. Cou Noir
B. Chamoisee
C. Sungau
D. Cou Blanc
E. Cou Clair
F. None of the above
14. _____ A large spot of white that is more than 1 ½ inch in any direction is reason for disqualification in which of the following cases:
1. Oberhasli buck
2. Toggenburg doe
3. Oberhasli doe
4. Toggenburg buck
A. 1 and 4
B. 2 and 4
C. 1, 3 and 4
D. 2 and 3
E. 1, 2 and 3
F. 2, 3 and 4
G. All are disqualified
15. _____ Which two breeds have the same minimum weight requirement for does?
A. Toggenburg and Saanen
B. Nubian and LaMancha
C. Oberhasli and LaMancha
D. Alpine and Nubian

Answer the following questions with a "T" for true and "F" for false

16. _____ The LaMancha breed is of African and Oriental origin
17. _____ A good market goat should be triangular in appearance, with the depth increasing from the front of the animal to the back
18. _____ High carcass yield grades is an important criteria in selecting Boer breeding stock
19. _____ The general appearance category of the scorecard for dairy and Boer bucks has the same number of points

- 20. _____ An ideal Nigerian Dwarf looks like a miniature French Alpine
- 21. _____ In Nigerian Dwarf classes, it is an advantage to be large for their age
- 22. _____ Short ears are acceptable on a Boer, as long as they are properly colored
- 23. _____ A dished face on a Nubian is a less important fault than a Roman nose on an Alpine
- 24. _____ Meat characteristics of a wether are generally observed in the hindquarters, loin, shoulder and neck
- 25. _____ The Dairy Character section of the scorecard specifically mentions these areas:
Neck, withers, ribs, chest, flank, thighs and tail

Match the following defects with the correct category from the Evaluation of Defects

- SS (Slight to Serious) M(Moderate) S(Serious) VS(Very Serious) D(Disqualification)**
- 26. _____ Under or overshot jaw
 - 27. _____ Teats that are pointed sideways
 - 28. _____ Toggenburg doe that is black
 - 29. _____ Pendulous udder
 - 30. _____ Double teats
 - 31. _____ LaMancha doe that weighs less than 130 pounds

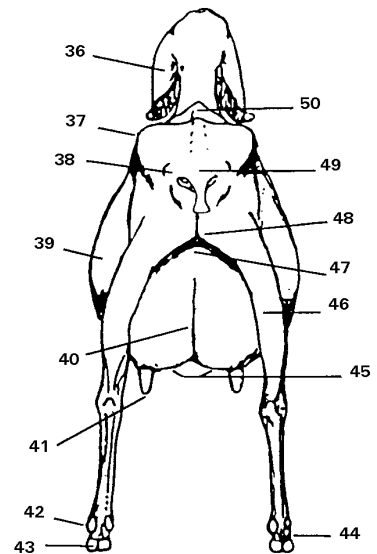
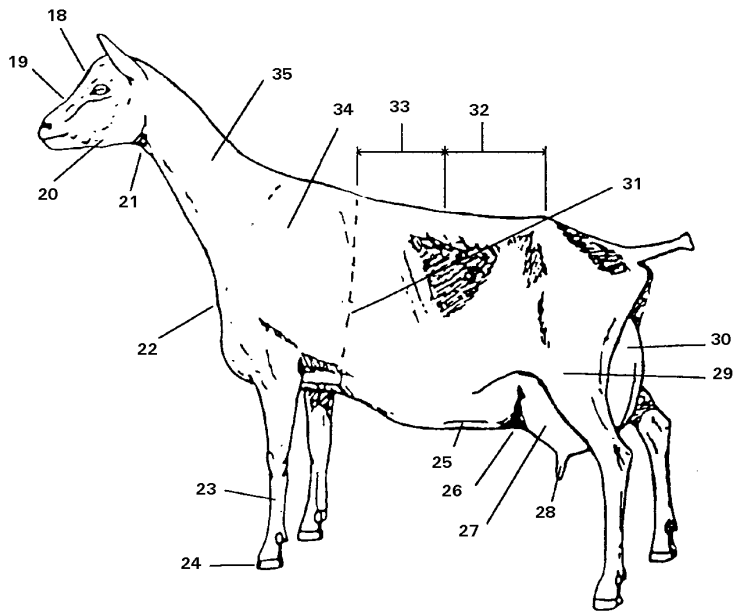
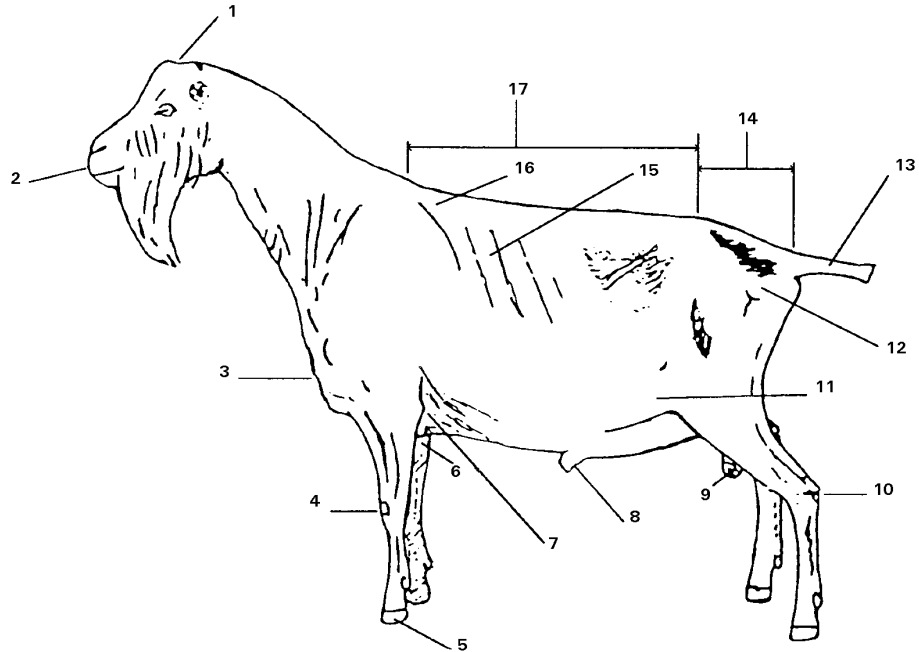
Fill in the blanks on the dairy scorecard

	Senior Doe	Junior Doe	Buck
General Appearance	32._____	36._____	39._____
Dairy Character	33._____	37._____	40._____
Body Capacity	34._____	38._____	41._____
Mammary System	35._____		

Fill in the blanks on The IBGA scorecard

	Senior Doe	Buck	Junior Doe
General Appearance	42._____	45._____	48._____
Body Capacity	43._____	46._____	49._____
Reproductive Organs	44._____	47._____	50._____

Write the correct name of each numbered part on the next page



1. _____
2. _____
3. _____
4. _____
5. _____
6. _____
7. _____
8. _____
9. _____
10. _____
11. _____
12. _____
13. _____
14. _____
15. _____
16. _____
17. _____
18. _____
19. _____
20. _____
21. _____
22. _____
23. _____
24. _____
25. _____

26. _____
27. _____
28. _____
29. _____
30. _____
31. _____
32. _____
33. _____
34. _____
35. _____
36. _____
37. _____
38. _____
39. _____
40. _____
41. _____
42. _____
43. _____
44. _____
45. _____
46. _____
47. _____
48. _____
49. _____
50. _____